

ROUND ABOUT

Worksheet - III

Name: Class: Roll No.:

A. Fill in the Blanks.

Pick-up point- 196, Vatican City, Russia, Africa, Largest Ocean, Egypt, Highest Mountain, Antarctica, California (US)


- There are countries across the globe.
- The smallest country in the world is
- The biggest country in the world is
- The Sahara desert situated in is the largest desert in the world.
- Pacific Ocean is the in the world.
- The longest river in the world is the Nile river in
- The Mount Everest is the peak of the world.
- The coldest place on earth is
- Death valley, is the hottest place on earth.

B. Many countries are known for their heritage places. Read carefully about them and write their correct names against the description.

Pick-up point- Stone-henge, Great Wall of China, Gobekli Tepe, Padmanabha Swamy Temple, Moais-Easter Island



This longest man-made structure in the world is a wall uniting several forts across the borders.....
.....



The oldest known temple in the world erected on a hill top in southeastern Turkey by prehistoric people.
.....



Comprising a symmetrical arrangement of blue stones, this structure is regarded as a place of worship of ancient earth deities.
.....




Being around 900 in number, this site in the rarest and most mysterious monuments on the planet.



Located in Kerala, in India, this is the richest religious site in the world.


C. Label the different parts of the plant given in the picture.

- 1 L A
- 2 F U T
- 3 F O E
- 4 S E
- 5 R T



D. Name the plants and trees taking clues from the Pick-up point. Number their pictures accordingly.

Pick-up point- BANYAN, PEAS, ROSE, CACTUS, MANGO, JASMINE, NEEM



- 1 N M
- 2 B N N
- 3 M G
- 4 C C S
- 5 J S M E
- 6 R S
- 7 P A

